

NUME :

PRENUME :

1 Calculeaza.

$\begin{array}{r} 297 \\ \times 35 \\ \hline \end{array}$	$\begin{array}{r} 5,26 \\ \times 43 \\ \hline \end{array}$
---	--

A	CA+	CA-	NA	R
---	-----	-----	----	---

2 Efectueaza : 408 ÷ 3

A	CA+	CA-	NA	R
---	-----	-----	----	---

3 Efectueaza : 164,8 + 26,57

A	CA+	CA-	NA	R
---	-----	-----	----	---

4 Completeaza egalitatile.

<p>4 ani = luni</p> <p>1 kg = gr</p> <p>1 h = min</p> <p>1 km = m</p>	<p>30 m = cm</p> <p>120 min = ore</p> <p>1 min = s</p> <p>1 m = cm</p> <p>1 l = cl</p>
---	--

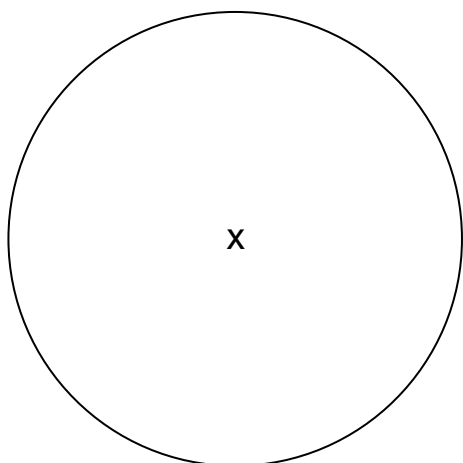
A	CA+	CA-	NA	R
---	-----	-----	----	---

5 Deseneaza un cerc cu centrul în A care trecere prin B.



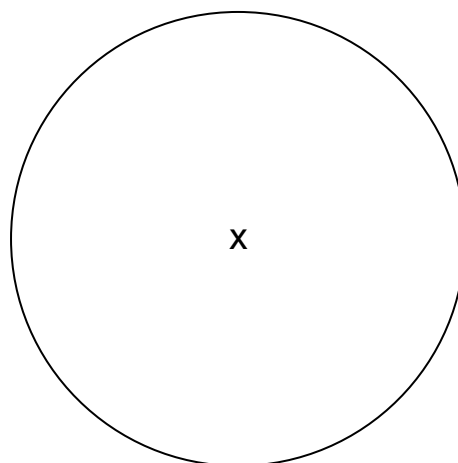
A	CA+	CA-	NA	R
---	-----	-----	----	---

6 Deseneaza o raza a acestui cerc.



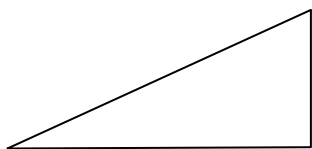
A	CA+	CA-	NA	R
---	-----	-----	----	---

7 Deseneaza diametrul acestui cerc.

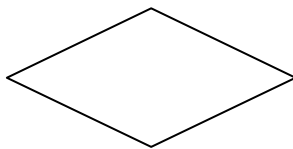


A	CA+	CA-	NA	R
---	-----	-----	----	---

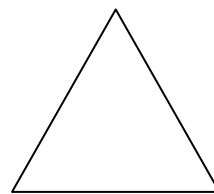
8 Încercuiește numele fiecărei figuri.



- ▶ *triunghi isoscel*
- ▶ *triunghi dreptunghic*
- ▶ *romb*
- ▶ *triunghi echilateral*



- ▶ *triunghi*
- ▶ *dreptunghi*
- ▶ *cub*
- ▶ *romb*

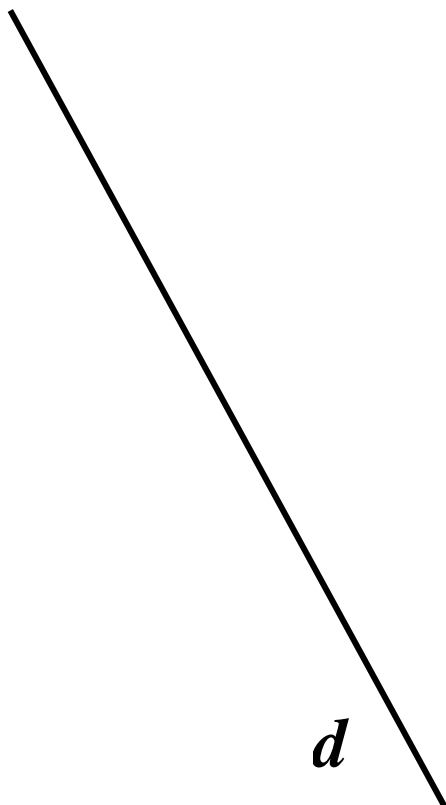


- ▶ *triunghi echilateral*
- ▶ *paralelogram*
- ▶ *triunghi dreptunghic*
- ▶ *romb*

A	CA+	CA-	NA	R
---	-----	-----	----	---

9


Deseneaza o linie paralela cu linia d .



A	CA+	CA-	NA	R
---	-----	-----	----	---

10

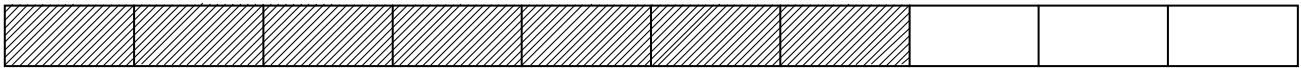
Deseneaza o linie perpendiculara pe linia d .



A	CA+	CA-	NA	R
---	-----	-----	----	---

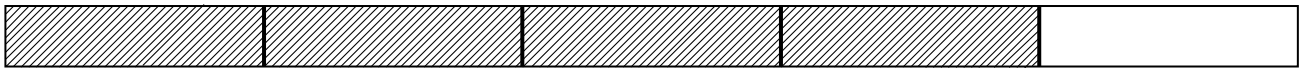
11 Uita-te la exemplul urmator :

Esemplu :



Am colorat cu gri $\frac{7}{10}$ din banda.

a) Finalizeaza fraza cu o fracsiune, a cum se vede în exemplu :



Am colorat cu gri din banda.

b) Coloreaza $\frac{3}{4}$ din banda.



c) Coloreaza $\frac{1}{3}$ din banda.



A CA+ CA- NA R

12 Încercuiește fracsiunea egala cu 5,4 :

$\frac{54}{100}$ $\frac{9}{10}$ $\frac{54}{10}$ $\frac{4}{5}$ $\frac{5}{4}$

A CA+ CA- NA R

13 Incercuieste numarul egal cu : $\frac{23}{10}$

230 0,23 2,3 23 3,2

A CA+ CA- NA R

14 Pune în ordine numerele de la cel mai mic la cel mai mare :

3,04 3,40 0,34 3,24 30,4 304,04 34,04

.....

A CA+ CA- NA R

15 Cititi enuntul problemei si gasiti raspunsul potrivit.

a) Paul cumpara 43 bomboane. Ana are 65 bomboane.

Câte bomboane are Ana în plus fata de Paul ?

Răspuns :

b) La un concurs, sportivii trebuie sa treaca trei probe : ciclism, înot i alergare.

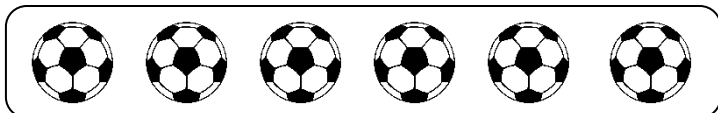
Ei fac 84 km cu bicicleta i 5 km de înot. În final, pentru cele 3 probe ei vor trebui sa parcurga 109 km.

Ce distanta au parcurs pe jos ?

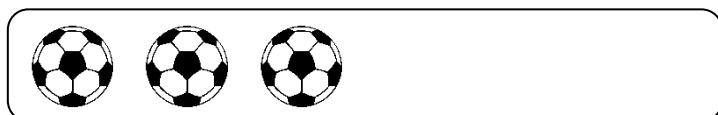
Răspuns :

A CA+ CA- NA R

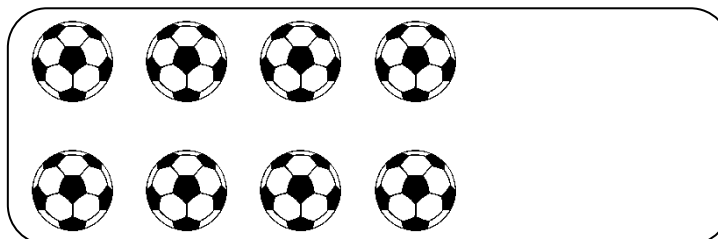
16 Completeaza.



↔ 12 €



↔ €



↔ €



↔ 18 €

A CA+ CA- NA R